

APPRENTICESHIP TRAINING

TRADE ENTRANCE EXAM

Study Guide



Apprenticeship
and Industry
Training

2024, His Majesty the King in right of the Province of Alberta, as represented by the Minister of Advanced Education, 19th floor, Commerce Place, Edmonton, Alberta, Canada, T5J 4L5. All rights reserved. No part of this material may be reproduced in any form or by any means, without the prior written consent of the Minister of Learning.

Care has been taken to acknowledge all sources and references in these materials. If there are any inadvertent omissions, please contact Alberta Advanced Education, 19th floor, Commerce Place, Edmonton, Alberta, Canada, T5J 4L5.

Table of Contents

What is a trade entrance exam?	3
What's the exam like?.....	3
How can this Study Guide help me prepare?.....	4
What is in this Study Guide?	4
How do I use this Study Guide?	5
Examination Instructions	7
Mathematical Formulas	8
Trade Entrance Exam Study Guide.....	9
Mathematics	9
English & Reading Comprehension.....	17
Science	20
Trade Entrance Exam Answer Key.....	33
Alberta Apprenticeship and Industry Training Client Services	34

What is a trade entrance exam?

If you are taking an apprenticeship program in Alberta, you must meet the educational requirements for your trade before you can start your technical training.

If you cannot prove you meet the educational requirements for your trade, you can write a trade entrance exam. Passing this exam will prove that you have the basic educational requirements for technical training in your trade. If you pass a trade entrance exam with a mark of 70% or higher, you are eligible to attend technical training.

Trade entrance exams are given by Alberta Apprenticeship and Industry Training and can be written at any Alberta Apprenticeship and Industry Training Office (see page 34 & 35 for locations).

What's the exam like?

There are five different trade entrance exams one for each of the five different clusters of trades. Each cluster includes trades and occupations that have similar skill and knowledge requirements.

For example, the Construction Craft Labourer occupation and the Hairstylist trade are both in Cluster 1. These two careers are very different, but require a similar knowledge of English, mathematics and science in their first year of technical training. (see page 6 for a list of the trades and occupations in each cluster).

The trade entrance exam for each cluster includes questions that test for educational requirements for the trades and occupations in that cluster. The exams are made up of 100 multiple-choice questions that cover the areas of English/reading comprehension, mathematics and science.

Depending on which cluster the trade is in, there will be a set number of questions from each of these areas as shown in the chart below.

Cluster	English/Reading Comprehension	Mathematics	Science	Total Questions
1	10	30	60	100
2	22	50	28	100
3	29	36	35	100
4	22	33	45	100
5	17	48	35	100
Average	20	40	40	

You have 3 hours to complete your exam. A mark of 70% or greater is required to pass the trade entrance exam.

How can this Study Guide help me prepare?

Many people who write a trade entrance exam have been out of school for several years. This Guide will give you an idea of the kind of questions that will be on the exam so you can see what areas you may need to address ahead of time. If you find you need some help, the following organizations may offer upgrading courses or pre-employment programs that can help you prepare to write the entrance exam.

- Bow Valley College
- Fairview College
- Grande Prairie Regional College
- MacEwan University
- Keyano College
- Lakeland College
- Lethbridge Community College
- Medicine Hat College
- Mount Royal College
- Norquest College
- Northern Lakes College
- Olds College
- Portage College
- Red Deer College
- Northern Alberta Institute of Technology (NAIT)
- Southern Alberta Institute of Technology (SAIT)

Your local school or school board may also be able to provide help in preparing for the exam.

This Guide can also help you refresh and improve your study and exam writing skills. Use it to practice before your exam. Contact Apprenticeship and Industry Training toll-free at 1-800-248-4823 for information.

What is in this Study Guide?

This trade Entrance Exam Study Guide includes:

- sample questions like those on any of the five trade entrance exams,
- an answer key for the questions included in the Study Guide,
- study and exam writing tips,
- copies of the formula and metric conversion charts used with the trade entrance exams,
- a sample diagram booklet that includes some typical diagrams used for the trade entrance exams, and
- a list of the trades and occupations included in each cluster.

How do I use this Study Guide?

This Study Guide can help you become more comfortable with writing exams and the kinds of questions included in each of the five trade entrance exams. There are 70 sample questions included in the Guide. Each one covers knowledge needed in at least one of the five clusters. The clusters a question covers are noted below it in the guide.

Here's how you can use these questions to get ready for your exam.

1. Read each question in the Study Guide carefully to get an idea of the kind of questions, the level of difficulty and the knowledge you will be tested on. This will help you focus your studying in areas needing the most work.
2. Exam writing takes planning to ensure you have enough time to answer all the questions on the exam to the best of your ability and within the time allowed. These sample questions can help you determine how much time it will take you to complete individual questions when writing the exam. Practise reading over and recognizing the questions that will take more or less time to answer.
3. Look at the diagrams and formulas that are used in the questions. Ensure you can interpret what is shown in the diagrams. Often, the questions that relate to diagrams require some interpretation and reasoning.
4. You may also want to study the formulas and conversion charts to make sure you know how to use them. You will be given the formula sheets and conversion charts to use during your exam.

ENTRANCE EXAMINATIONS ARRAY

ENTRANCE 1 77/01/12/10

Barber
Construction Craft Labourer
Hairstylist

ENTRANCE 2 77/02/12/10

Baker
Boilermaker
Bricklayer
Cabinetmaker
Carpenter
Concrete Finisher
Cook
Crane and Hoisting Equipment Operator
Floorcovering Installer
Glazier
Insulator
Ironworker
Lather - Interior Systems Mechanic
Locksmith
Metal Fabricator (Fitter)
Painter and Decorator
Parts Technician
Roofer
Sheet Metal Worker
Welder

ENTRANCE 3 77/03/12/10

Agricultural Equipment Technician
Auto Body Technician
Automotive Service Technician
Heavy Equipment Technician
Landscape Horticulturist
Motorcycle Mechanic
Outdoor Power Equipment Technician
Recreation Vehicle Service Technician
Transport Refrigeration Technician
Water Well Driller

ENTRANCE 4 77/04/12/10

Elevator Constructor
Gas Utility Operator
Gasfitter
Machinist
Millwright
Plumber
Sprinkler Systems Installer
Steamfitter – Pipefitter

ENTRANCE 5 77/05/12/10

Appliance Service Technician
Communication Technician
Electrical Motor Systems Technician
Electrician
Instrument Technician
Powerline Technician
Power System Electrician
Refrigeration and Air Conditioning Mechanic

NOTE: A pass mark earned on Entrance Exam 5 = deemed to have also passed Entrance Exams 4, 3, 2 and 1.

A pass mark earned on Entrance Exam 4 = deemed to have also passed Entrance Exams 3, 2 and 1.

A pass mark earned on Entrance Exam 3 = deemed to have also passed Entrance Exam 1 (due to the significant differential in math/science content, a pass mark on Entrance Exam 3 does NOT allow a pass mark on Entrance Exam 2).

A pass mark earned on Entrance Exam 2 = deemed to have also passed Entrance Exam 1.

Alberta entrance exams are also used for entrance into apprenticeship programs in the Yukon, Northwest and Nunavut territories. Applicants to an Alberta apprenticeship program who have successfully completed an Alberta entrance exam in any of these jurisdictions have met the minimum entrance requirements of the relevant trade in Alberta.

Examination Instructions

THESE INSTRUCTIONS ARE INCLUDED IN THE EXAM BOOKLET.

You should have in front of you:

- (1) a test booklet;
- (2) a green calculation sheet
- (3) an answer sheet (be sure you have filled in the required information); and
- (4) an eraser and an HB pencil.

IF YOU DO NOT HAVE ALL OF THE ABOVE MATERIALS, PLEASE INFORM THE TEST ADMINISTRATOR.

This examination is composed of 100 multiple-choice questions, each with four answer choices; ALL examinees are to complete all 100 questions.

You may use any of the formulas provided on page 5 of this examination.

Read each question carefully and choose the ONE best answer. Record your answer on the answer sheet in the space that corresponds to the question number. Completely fill in the space having the same letter as the answer you have chosen. Use only an HB pencil. Be sure to erase cleanly any answer you wish to change.

- Sample Question: 1. What is the capital of Canada?
- A. Vancouver
 - B. Yellowknife
 - C. Ottawa
 - D. St. John's

The correct answer to this question is C. You would indicate that on the answer sheet as follows:

1. A B C D

<input type="radio"/>	<input type="radio"/>	<input checked="" type="radio"/>	<input type="radio"/>
-----------------------	-----------------------	----------------------------------	-----------------------

Try to answer all questions. In general, if you have some knowledge about a question, it is better to try to answer it. You will **NOT** be penalized for guessing.

In the test questions, he is used as a generic term to denote any person, male or female.

You will have three hours to complete the test. Once the test has begun, you should continue from page to page, in sequence, throughout the test booklet.

If you have any questions, please ask them now before beginning the test.

DO NOT GO ON UNTIL YOU ARE TOLD TO DO SO.

Mathematical Formulas (These formulas are included in the exam booklet)

You may make use of the following formulas when answering certain questions in this examination.

$$\pi = 3.14$$

$$\text{Circumference of a circle} = \pi D$$

$$\text{Area of a rectangle} = \text{Length} \times \text{Width}$$

$$\text{Area of a circle} = \pi r^2$$

$$\text{Area of a triangle} = \frac{\text{Altitude} \times \text{base}}{2}$$

$$\text{Volume of a cylinder} = \pi r^2 h$$

$$\text{Volume of a cube} = \text{Length} \times \text{Width} \times \text{Height}$$

METRIC CONVERSIONS

Distance

Imperial		Metric		Metric		Imperial
1 inch	=	2.540	centimeters	1 centimeter	=	0.3937 inch
1 foot	=	0.3048	meter	1 meter	=	3.281 feet
1 yard	=	0.9144	meter	1 meter	=	1.094 yards
1 rod	=	5.029	meters	1 meter	=	0.20 rods
1 mile	=	1.609	kilometers	1 kilometer	=	0.6214 mile

Capacity

Imperial				U.S.		
1 pint	=	0.568	liters	1 pint (U.S.)	=	0.473 liter
1 gallon	=	4.546	liters	1 quart (U.S.)	=	0.946 liter
1 bushel	=	36.369	liters	1 gallon (U.S.)	=	3.785 liters
1 fluid oz.	=	28.41	ml	1 barrel oil	=	158.99 liters
1 quart	=	1.137	liters	1 cup-8 fl. ounces	=	227.00 ml
Metric						
1 liter	=	1.76	pints	1 tablespoon	=	14.21 ml
1 liter	=	0.220	gallon	1 teaspoon	=	4.74 ml
1 liter	=	.88	quart			

Weight

Imperial				Metric		
1 ounce (troy)	=	31.103	grams	1 gram	=	0.032 ounce (troy)
1 ounce (avoir)	=	28.350	grams	1 gram	=	0.035 ounce (avoir)
1 pound (troy)	=	373.242	grams	1 kilogram	=	2.679 pounds (troy)
1 pound (avoir)	=	453.592	grams	1 kilogram	=	2.205 pounds (avoir)
1 ton (short)	=	1 tonne			=	1.102 ton (short)
(2000 lb)	=	0.907 tonne*		1 tonne	=	1000 kilograms

Trade Entrance Exam Study Guide

Use this study guide to get a sense for how much time is required to answer questions of the type included in the guide. An important skill in writing multiple choice exams is ensuring you have enough time to get through all questions on the exam. The time allotted to write the Entrance Exam is 3 hours and each exam includes 100 questions. Therefore, you have an average of approximately $1\frac{1}{2}$ minutes per question to complete the exam within the time allowed. Note the cluster that includes the trade you have chosen to enter (page 6) and pay special attention to the questions that are identified for that cluster.

NOTE: The answer key for all the following questions in this study guide can be found at the end of the study guide (page 33)

SECTION ONE: MATHEMATICS

Studying for the mathematics section of the trade entrance exam.

Each Entrance Exam includes a section for mathematics questions. The questions are designed to challenge the exam writer's ability to perform basic calculations, manipulate basic equations, and use formulas. The types of questions asked and the difficulty will vary with the exam for each cluster.

1. $11 \times 6 + 7 \times 4 =$
- A. 94
 - B. 101
 - C. 292
 - D. 572

This question is applicable to Cluster 2, Cluster 3, Cluster 4, Cluster 5.

2. Which is the smallest number?
- A. 0.01001
 - B. 0.00998
 - C. 0.00385
 - D. 0.00297

This question is applicable to Cluster 2, Cluster 3, Cluster 5.

3. $-23.7 + 88 - 56 + 407.9 =$
- A. 202.9
 - B. 287.6
 - C. 416.2
 - D. 463.6

This question is applicable to Cluster 2, Cluster 4, Cluster 5.

Trade Entrance Exam Study Guide

4. $7 \text{ ft. } 4 \text{ in.} + 10 \text{ ft. } 9 \text{ in.} =$

- A. 183 in.
- B. 197 in.
- C. 203 in.
- D. 217 in.

This question is applicable to Cluster 2, Cluster 3, Cluster 4, Cluster 5.

5. A mother wants to divide \$680.00 among her children according to the ratio 2:4:6. The shares would be

- A. \$113.33, \$226.67, \$340.00
- B. \$118.33, \$220.67, \$340.00
- C. \$120.00, \$220.00, \$340.00
- D. \$136.00, \$204.00, \$340.00

This question is applicable to Cluster 2, Cluster 3, Cluster 4, Cluster 5.

6. If 5 liters of paint cover 20 square meters, how many liters are required to cover 400 square meters?

- A. 40 liters
- B. 52 liters
- C. 80 liters
- D. 100 liters

This question is applicable to Cluster 2, Cluster 3, Cluster 4, Cluster 5.

7. $\frac{3}{8} + \frac{3}{4} =$

- A. $\frac{9}{32}$
- B. $\frac{1}{2}$
- C. $1\frac{1}{8}$
- D. $1\frac{1}{4}$

This question is applicable to Cluster 2, Cluster 3, Cluster 4, Cluster 5.

Trade Entrance Exam Study Guide

8. A piece of sheet metal is $28\frac{1}{2}$ inches wide. A piece $13\frac{5}{16}$ inches is cut off. How wide will the remaining piece of sheet metal be?
- A. $14\frac{1}{4}$ inches.
 - B. $15\frac{3}{16}$ inches.
 - C. $15\frac{13}{16}$ inches.
 - D. $16\frac{1}{4}$ inches.

This question is applicable to Cluster 2, Cluster 3, Cluster 5.

9. When 2.49 is multiplied by 0.17, the result rounded to 2 decimal places is
- A. 0.04
 - B. 0.42
 - C. 4.23
 - D. 42.33

This question is applicable to Cluster 1.

10. Subtract 64.85 from 209.11
- A. 44.260
 - B. 144.260
 - C. 202.625
 - D. 273.960

This question is applicable to Cluster 1, Cluster 2, Cluster 3, Cluster 4, Cluster 5.

11. Express $\frac{3}{8}$ as a decimal number.
- A. 0.240
 - B. 0.267
 - C. 0.375
 - D. 2.667

This question is applicable to Cluster 2, Cluster 3, Cluster 4.

Trade Entrance Exam Study Guide

12. What is 8^2 ?

- A. 10
- B. 16
- C. 64
- D. 82

This question is applicable to Cluster 1.

13. The area of a circle 200 mm in diameter is approximately how many times greater than the area of a circle 40 mm in diameter?

- A. 5
- B. 10
- C. 20
- D. 25

This question is applicable to Cluster 2, Cluster 3, Cluster 4.

14. The area of a circle with a diameter of 240 mm is

- A. 75.36 cm^2
- B. 150.72 cm^2
- C. 452.16 cm^2
- D. $1,808.64 \text{ cm}^2$

This question is applicable to Cluster 1, Cluster 2.

15. A corner grocery store sold 14 boxes of oranges. Each box contained 5 pounds of oranges. If the profit per box was \$1.85, what was the total profit?

- A. \$129.50
- B. \$37.84
- C. \$25.90
- D. \$12.95

This question is applicable to Cluster 2, Cluster 3, Cluster 4, Cluster 5.

Trade Entrance Exam Study Guide

16. Barry has a job painting new houses. One week he worked the following hours:

Monday	7.5 hours
Tuesday	10.0 hours
Wednesday	6.0 hours
Thursday	12.0 hours
Friday	14.5 hours
Saturday	10.0 hours

What was the average number of hours Barry worked per day?

- A. 9.5
- B. 10.0
- C. 10.5
- D. 11.0

This question is applicable to Cluster 2, Cluster 3, Cluster 4, Cluster 5.

17. How many cubic meters of cement are required to cover a walkway 7 m long, 0.95 m wide, and 10 cm deep?

- A. 66.500 m³
- B. 6.650 m³
- C. 0.737 m³
- D. 0.665 m³

This question is applicable to Cluster 2, Cluster 3, Cluster 4, Cluster 5.

18. A rectangular school yard 280 meters by 245 meters is to be fenced. How many meters of fencing will be required to fence it completely?

- A. 525 m
- B. 705 m
- C. 770 m
- D. 1050 m

This question is applicable to Cluster 2, Cluster 3, Cluster 4.

19. A parking lot charges \$1.50 for the first hour of parking and 55 cents for each additional half hour. How much would it cost to park a car from 12:45 p.m. to 6:15 p.m.?

- A. \$4.65
- B. \$6.05
- C. \$6.45
- D. \$11.28

This question is applicable to Cluster 2, Cluster 3, Cluster 4, Cluster 5.

Trade Entrance Exam Study Guide

20. If a contractor pays an average wage of \$20.00 per hour and wants to make a 15% mark-up on the cost of labour, what will the contractor charge as an average labour cost on contracts?
- A. \$20.30
 - B. \$21.50
 - C. \$23.00
 - D. \$26.00

This question is applicable to Cluster 3, Cluster 4, Cluster 5.

21. What is the circumference of a circle with a diameter of 50 mm?
- A. 78.5 mm
 - B. 157.0 mm
 - C. 78.5 cm
 - D. 157.0 cm

This question is applicable to Cluster 3, Cluster 4, Cluster 5.

22. $\frac{5}{8}$ divided by $\frac{1}{2}$ equals
- A. $1\frac{1}{4}$
 - B. $\frac{3}{8}$
 - C. $\frac{1}{4}$
 - D. $\frac{3}{16}$

This question is applicable to Cluster 1.

23. If $3(y + 3y) = 12$, solve for y.
- A. 2.0
 - B. 1.5
 - C. 1.0
 - D. 0.0

This question is applicable to Cluster 2, Cluster 3, Cluster 5.

Trade Entrance Exam Study Guide

24. If $4(2x + 3x) = 30$, solve for x .
- A. 1.50
 - B. 1.75
 - C. 2.00
 - D. 2.50

This question is applicable to Cluster 2, Cluster 3, Cluster 5.

25. What is the simple interest of \$1500.00 for 4 months at $6\frac{3}{4}\%$ annual interest?
- A. \$222.22
 - B. \$101.25
 - C. \$50.63
 - D. \$33.75

This question is applicable to Cluster 1.

26. Which polynomial expression would have a value of -2 when $x = -2$?
- A. $2x^2 + 2x - 2$
 - B. $3x^2 - 4x + 1$
 - C. $x^2 + 3x + 2$
 - D. $-x^2 - 4x - 6$

This question is applicable to Cluster 3, Cluster 5.

27. Five rental cars require four new tires each. The price for one new tire is \$84.00. What would be the total cost including 7% tax for new tires for all five cars?
- A. \$2856.00
 - B. \$1797.60
 - C. \$1680.00
 - D. \$1570.09

This question is applicable to Cluster 2, Cluster 4, Cluster 5.

Trade Entrance Exam Study Guide

28. What is the radius of a circle with a diameter of 240 mm?
- A. 76.43 mm
 - B. 480.00 mm
 - C. 12.00 mm
 - D. 120.00 mm

This question is applicable to Cluster 2, Cluster 3, Cluster 4, Cluster 5.

29. A journeyperson earns \$23.45 per hour. A new apprentice earns 60% of the journeyperson rate and has 27% deductions. What would the apprentice's net weekly earnings be for a 40 hour week?
- A. \$273.90
 - B. \$379.89
 - C. \$410.84
 - D. \$562.80

This question is applicable to Cluster 2, Cluster 3, Cluster 4, Cluster 5.

30. Refer to Diagram 011. If $x = 12.5$ cm, what is the area of the rectangle?
- A. 22.73 cm^2
 - B. 30.25 cm^2
 - C. 68.75 cm^2
 - D. 87.50 cm^2

This question is applicable to Cluster 1, Cluster 2, Cluster 3.

Trade Entrance Exam Study Guide

NOTE: The answer key for all the following questions in this study guide can be found at the end of the study guide (page 33)

SECTION TWO: ENGLISH & READING COMPREHENSION

Studying for the English/Reading Comprehension section of the trade entrance exam.

Clusters 1 through 5 include a section on reading comprehension. Cluster 1 also includes questions on English grammar. The English questions are designed to challenge the exam writer's ability to read, apply the rules of good grammar, and interpret written materials. The reading comprehension questions require the exam writer to read different types of information, recall details of the passage or material, and make inferences based on your interpretation of what you have just read.

CAREFULLY READ THE FOLLOWING PARAGRAPHS AND ANSWER QUESTIONS 31 TO 34

Multiple Choice Exam Writing Strategies

Watch Your Time

For every exam it is important to calculate the amount of time you can spend on each section or question according to the number of marks it is worth. (Do the easy questions or sections first - this is helpful for calming nerves and establishing your concentration.) If your exam is all multiple choice, you may want to note where you should be after one hour and after two hours to ensure you aren't falling too far behind. It is important to work at a fairly quick pace; multiple choice exams are notorious for being long.

Process the Question

Careless mistakes are often made when students rush through the "stem" of the question, missing important information. Read the question carefully, noting key terms. Watch for negative or positive phrasing, or qualifying words like "always" or "never" which can drastically change the meaning of a statement. If you don't understand the stem, ask the exam supervisor for clarification. Before you look at the list of possible responses, try to recall the answer on your own. Then look at the alternatives to see which one best matches your answer. As you read through the possible responses, make a mental note of the ones you know are wrong. This will mean less reading time if you have to come back to the question later. If none of the selections seems close, re-read the question and try to determine what you missed. If you still can't get it, go on. Something in another question may trigger your memory so you can recall the answer later.

31. What is recommended as a method for establishing your concentration?
- A. Work at a fairly quick pace.
 - B. Look for qualifying words like "never" and "always".
 - C. Do the easy questions or sections first.
 - D. Read the question carefully, underlining key terms.

This question is applicable to Cluster 1, Cluster 2, Cluster 3, Cluster 4, Cluster 5.

Trade Entrance Exam Study Guide

32. What is a recommended strategy for ensuring you have enough time to complete the exam?
- A. Read each question quickly trying to get a sense of what is being asked for.
 - B. Estimate how far you should progress through the exam for each hour and mark on your notepaper.
 - C. Ask the exam supervisor to give you a reminder when each hour has passed.
 - D. As you read through the possible responses, mark off the ones you know are wrong.

This question is applicable to Cluster 1, Cluster 2, Cluster 3, Cluster 4, Cluster 5.

33. How should you work through a question that appears to have more than one correct answer?
- A. Ask for assistance from someone around you.
 - B. Guess since it's only one question.
 - C. If you are not sure always choose option "D".
 - D. Start by eliminating the answers you know are wrong.

This question is applicable to Cluster 1, Cluster 2, Cluster 3, Cluster 4, Cluster 5.

34. Why is it important to read through the "stem" carefully when answering the question?
- A. There may be words like "always" and "never" that drastically change the meaning of the statement.
 - B. It may be possible to answer the question on your own before looking at the list of possible responses.
 - C. You may be able to trigger something in your memory that will help with an earlier question you were not able to answer.
 - D. You will get a better sense of how long it is going to take to write the exam and be able to judge more accurately if you still have enough time.

This question is applicable to Cluster 1, Cluster 2, Cluster 3, Cluster 4, Cluster 5.

35. Which sentence uses correct grammar?
- A. Our printers don't work too good.
 - B. Brewing coffee results in bitterness using more water.
 - C. Apprenticeship involves a combination of work experience and formal training.
 - D. Tests used to measure your knowledge take long to write.

This question is applicable to Cluster 1.

Trade Entrance Exam Study Guide

36. Which of the following groups of words is not a complete thought?
- A. Building a large house takes time.
 - B. When you have a chance to travel to a tropical location.
 - C. Given enough information, you should be able to answer the question.
 - D. Take a sweater along, it may be chilly.

This question is applicable to Cluster 1.

37. Choose the correct spelling.
- A. Adressed
 - B. Adresed
 - C. Addressed
 - D. Addressed

This question is applicable to Cluster 1.

Trade Entrance Exam Study Guide

NOTE: The answer key for all the following questions in this study guide can be found at the end of the study guide (page 33)

SECTION THREE: SCIENCE

Studying for the Science section of the trade entrance exam.

Each Entrance Exam includes a section for Science questions. The questions are designed to challenge the exam writer's ability to recall basic information, manipulate basic equations, and interpret basic scientific relationships. The types of questions asked and the difficulty will vary with the exam for each cluster.

38. What does 6.4 liters of water equal in imperial gallons?

- A. 1.408 gal.
- B. 3.635 gal.
- C. 5.628 gal.
- D. 5.632 gal.

This question is applicable to Cluster 2, Cluster 4, Cluster 5.

39. Convert 11.4 km to miles and express to two decimal places.

- A. 5.70 mi.
- B. 7.08 mi.
- C. 9.79 mi.
- D. 18.34 mi.

This question is applicable to Cluster 1, Cluster 2, Cluster 3, Cluster 4, Cluster 5.

40. How many tablespoons are there in 49.74 ml?

- A. 3.50 tbsp.
- B. 10.49 tbsp.
- C. 35.00 tbsp.
- D. 706.81 tbsp.

This question is applicable to Cluster 1, Cluster 2, Cluster 3, Cluster 4, Cluster 5.

Trade Entrance Exam Study Guide

41. When a gas is heated it

- A. expands.
- B. contracts.
- C. condenses.
- D. solidifies.

This question is applicable to Cluster 1, Cluster 2, Cluster 3, Cluster 4, Cluster 5.

42. Water at sea level heated to 100° Celsius would be

- A. expanding.
- B. just beginning to change to a solid.
- C. starting to boil.
- D. contracting.

This question is applicable to Cluster 1, Cluster 2, Cluster 3, Cluster 4, Cluster 5.

43. An object floats in water because the weight of water displaced is

- A. more than the object's weight.
- B. less than the object's weight.
- C. equal to the object's weight.
- D. not related to the object's weight.

This question is applicable to Cluster 1, Cluster 2, Cluster 3, Cluster 4, Cluster 5.

44. The cooling effect of alcohol on the skin is the result of

- A. sublimation of liquids.
- B. condensation of liquids.
- C. evaporation of liquids.
- D. contraction of liquids.

This question is applicable to Cluster 1, Cluster 2, Cluster 3, Cluster 4, Cluster 5.

45. Which of the following could be used to express density?

- A. Grams per centimeter.
- B. Grams per square centimeter.
- C. Grams per cubic centimeter.
- D. Grams per kilometer.

This question is applicable to Cluster 1, Cluster 2, Cluster 3, Cluster 4, Cluster 5.

Trade Entrance Exam Study Guide

46. The pressure gauge on a bottle containing a gas would show a lower reading if the gas in the bottle was
- A. to expand.
 - B. cooled.
 - C. heated.
 - D. a constant temperature.

This question is applicable to Cluster 1, Cluster 2, Cluster 3, Cluster 4, Cluster 5.

47. Which state is matter in if it has a definite shape and a definite volume?
- A. solid.
 - B. liquid.
 - C. gas.
 - D. fluid.

This question is applicable to Cluster 1, Cluster 2, Cluster 3, Cluster 4, Cluster 5.

48. The reason ice floats on water is because it
- A. is a solid.
 - B. contains more air.
 - C. has less heat energy than water.
 - D. is less dense than water.

This question is applicable to Cluster 1, Cluster 2, Cluster 3, Cluster 4, Cluster 5.

49. Compared to an elevation of 1,000 meters, the air pressure at sea level is generally
- A. lower.
 - B. higher.
 - C. the same.
 - D. lower in the summer.

This question is applicable to Cluster 1, Cluster 2, Cluster 3, Cluster 4, Cluster 5.

50. Assuming equal volumes, the expansion of solids is usually
- A. greater than liquids.
 - B. the same as liquids.
 - C. greater than gases
 - D. less than liquids.

This question is applicable to Cluster 1, Cluster 2, Cluster 3, Cluster 4, Cluster 5.

Trade Entrance Exam Study Guide

51. Which of the following is true?
- A. A liquid has no mass, shape, or volume.
 - B. A liquid will expand to fit the container it is in.
 - C. Liquids **can not** be easily compressed.
 - D. A liquid has mass but no shape or volume.

This question is applicable to Cluster 1, Cluster 2, Cluster 3, Cluster 4, Cluster 5.

52. The ability to do work is known as
- A. power.
 - B. energy.
 - C. force.
 - D. effort.

This question is applicable to Cluster 1, Cluster 2, Cluster 3, Cluster 4, Cluster 5.

53. A parallel circuit is one in which
- A. two batteries are included in the circuit.
 - B. current can flow through only one path.
 - C. current can flow through more than one path.
 - D. light bulbs must not be used.

This question is applicable to Cluster 3, Cluster 4, Cluster 5.

54. A series circuit includes several lamps. When the light bulb from one lamp is removed the other lights will
- A. stay lit.
 - B. stay lit and get brighter.
 - C. stay lit and get dimmer.
 - D. no longer be lit.

This question is applicable to Cluster 3, Cluster 4, Cluster 5.

Trade Entrance Exam Study Guide

55. Refer to diagram 003. To ensure safe climbing practice, the base of a straight ladder should be one meter out for every four meters of height to the point of support. If $h = 8$ m, what is the value of d ?
- A. 2 m
 - B. 2.5 m
 - C. 3.2 m
 - D. 4 m

This question is applicable to Cluster 1, Cluster 2, Cluster 3, Cluster 4, Cluster 5.

56. When trying to move a 150 kg rock using a 3 meter pry bar you can make the task easier by placing a smaller rock under the pry bar
- A. 1.0 meter from the large rock.
 - B. 1.5 meters from the large rock.
 - C. 2.0 meters from the large rock.
 - D. 2.5 meters from the large rock.

This question is applicable to Cluster 1, Cluster 2, Cluster 3, Cluster 4, Cluster 5.

57. Given the relationship $E(\text{voltage}) = I(\text{current}) \times R(\text{resistance})$, what is the current in a circuit with $E = 6$ volts and $R = 15$ ohms?
- A. 0.04 amps
 - B. 0.40 amps
 - C. 4.00 amps
 - D. 40.00 amps

This question is applicable to Cluster 3, Cluster 4, Cluster 5.

58. A liter of water has a mass of
- A. 1 kg
 - B. 1 km
 - C. 1 ksec
 - D. 1 kW

This question is applicable to Cluster 2, Cluster 3, Cluster 4.

Trade Entrance Exam Study Guide

59. A fulcrum is used to support a

- A. wedge.
- B. ramp.
- C. drawer.
- D. lever.

This question is applicable to Cluster 2, Cluster 3, Cluster 4, Cluster 5.

60. Which of the following does not affect the amount of heat a body will store?

- A. Density.
- B. Altitude.
- C. Mass.
- D. Both (a) and (c).

This question is applicable to Cluster 2, Cluster 3, Cluster 4, Cluster 5.

61. If friction can cause heat to be released, letting a cord slide quickly through your hands will cause

- A. your hands to feel cool.
- B. your hands to become wet.
- C. your hands to feel warmer.
- D. your hands to feel stiff.

This question is applicable to Cluster 1, Cluster 2, Cluster 3, Cluster 4, Cluster 5.

62. What causes a coasting vehicle in motion to eventually come to a stop?

- A. Friction.
- B. Expansion.
- C. Contraction.
- D. Potential Energy.

This question is applicable to Cluster 3, Cluster 4, Cluster 5.

63. The chemical combination of two or more elements is known as a/an

- A. isotope.
- B. ion.
- C. compound.
- D. catalyst.

This question is applicable to Cluster 1, Cluster 2, Cluster 3, Cluster 4, Cluster 5.

Trade Entrance Exam Study Guide

64. The molecular composition of water is
- A. 2 hydrogen atoms + 2 oxygen atoms.
 - B. 1 hydrogen atom + 1 oxygen atom.
 - C. 2 hydrogen atoms + 1 oxygen atom.
 - D. 2 oxygen atoms + 1 Hydrogen atom.

This question is applicable to Cluster 1, Cluster 2, Cluster 3, Cluster 4, Cluster 5.

65. If a gas in a closed space is compressed, it will
- A. decrease in temperature.
 - B. increase in temperature.
 - C. solidify.
 - D. move more slowly.

This question is applicable to Cluster 3, Cluster 4, Cluster 5.

66. The reason inventors have not been able to invent a machine that is 100% efficient is because of
- A. gravity.
 - B. inertia.
 - C. technology.
 - D. friction.

This question is applicable to Cluster 2, Cluster 3, Cluster 4, Cluster 5.

67. How much work is done in 1 minute by a machine operating at 300 ft. lb./sec
- A. 300 ft lb
 - B. 1,800 ft lb
 - C. 18,000 ft lb
 - D. 180,000 ft lb

This question is applicable to Cluster 2, Cluster 3, Cluster 4, Cluster 5.

68. The volume of a cube which is 5 meters per side is
- A. 5 cubic meters.
 - B. 25 cubic meters.
 - C. 75 cubic meters.
 - D. 125 cubic meters.

This question is applicable to Cluster 2, Cluster 3, Cluster 4, Cluster 5.

Trade Entrance Exam Study Guide

69. Refer to Diagram 020. Four pumps are shown in the diagram. Arrows show the direction the piston is being moved. Choose the only pump that will pump water.
- A.
 - B.
 - C.
 - D.

This question is applicable to Cluster 3, Cluster 4.

70. Refer to Diagram 014. Which diagram shows what happens when heat is applied to a bi-metal strip consisting of stainless steel on the top and brass on the bottom? (Brass has the higher expansion rate.)
- A.
 - B.
 - C.
 - D.

This question is applicable to Cluster 1.

**TRADE ENTRANCE
EXAM
STUDY GUIDE**

DIAGRAM BOOK

Entrance

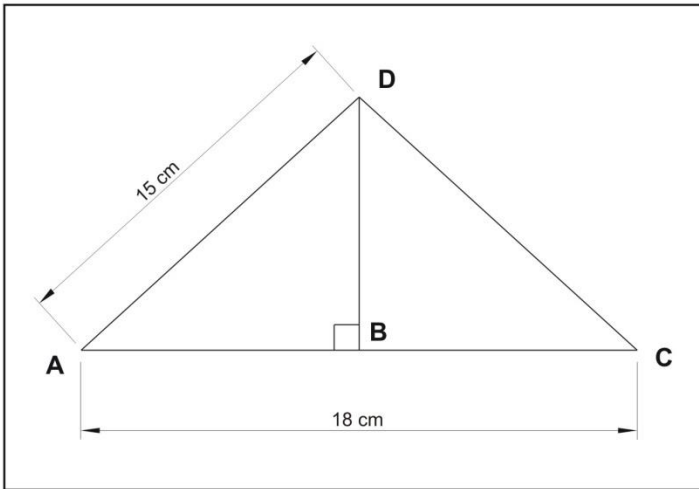


Diagram 001




Diagram 002

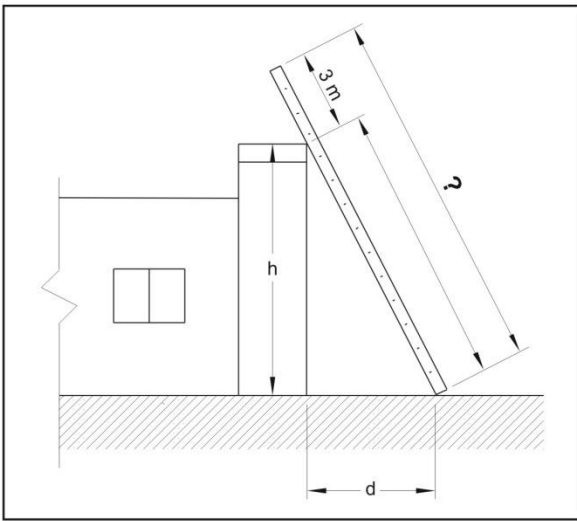


Diagram 003

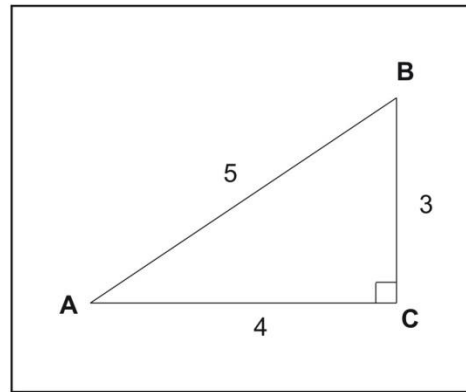


Diagram 004

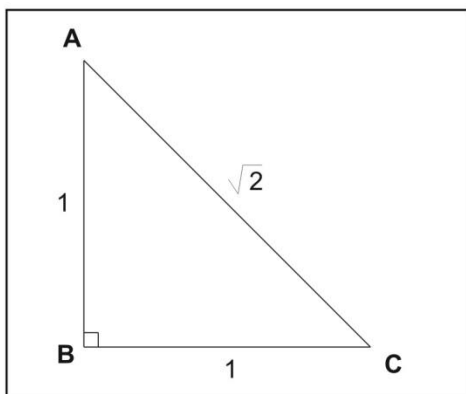


Diagram 005

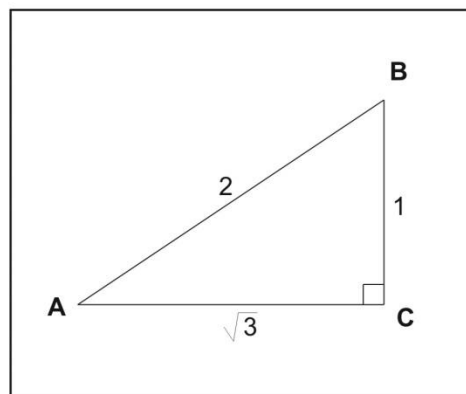


Diagram 006

Entrance

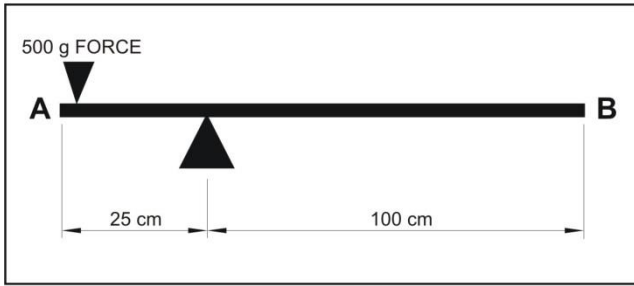


Diagram 007

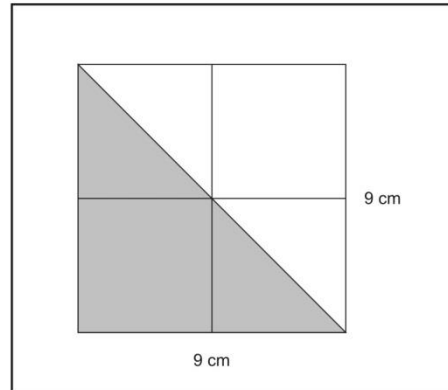


Diagram 008

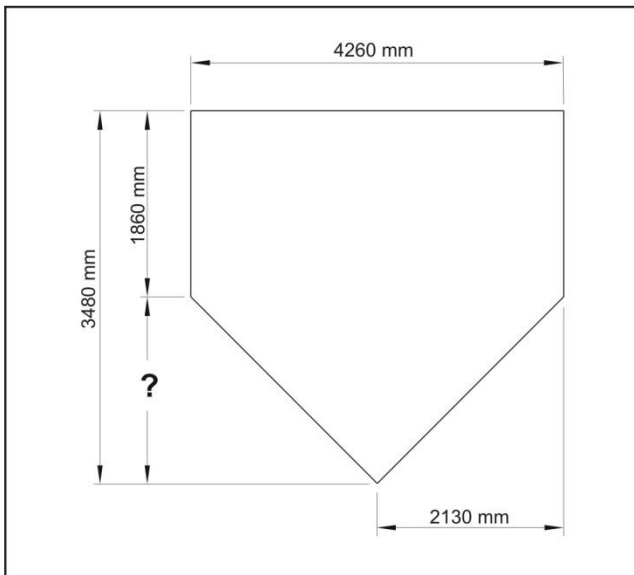


Diagram 009

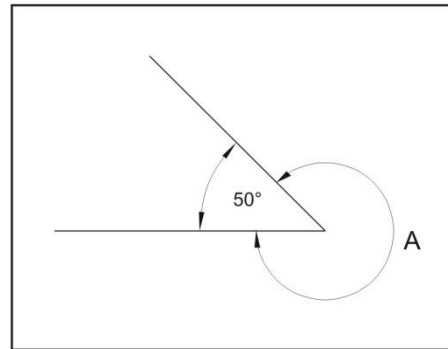


Diagram 010

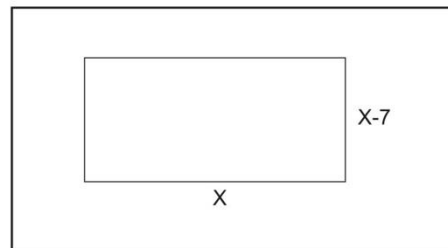


Diagram 011

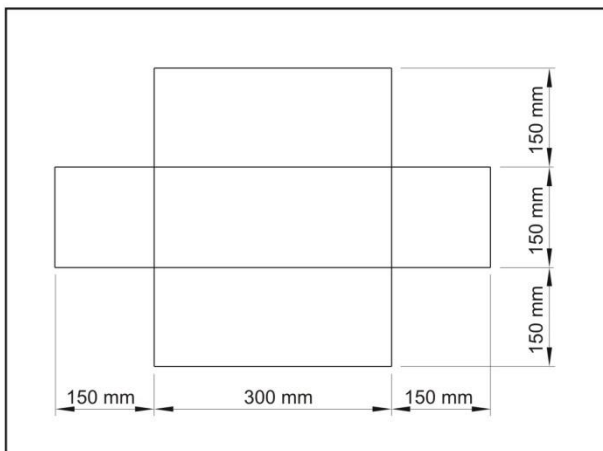


Diagram 012

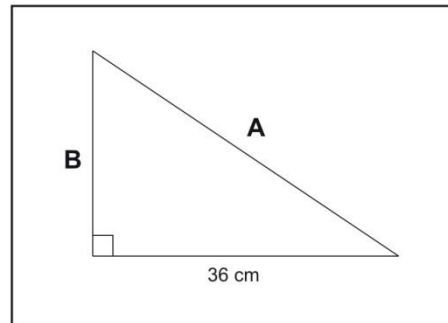


Diagram 013

Entrance

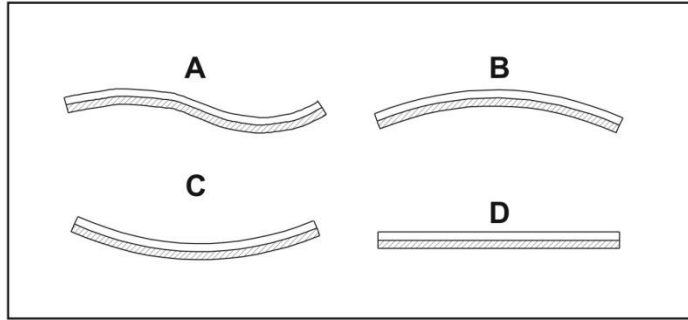


Diagram 014

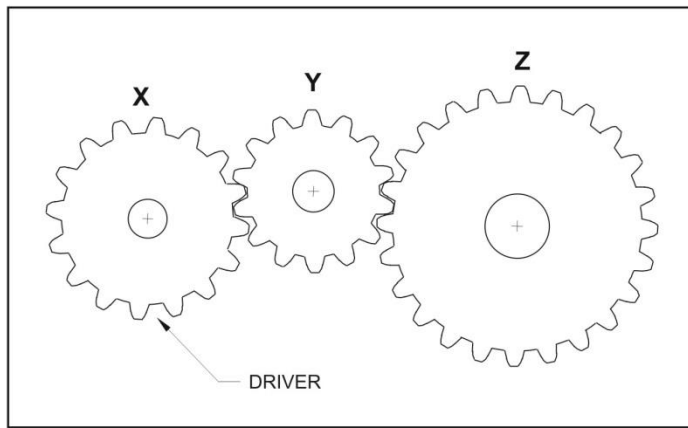


Diagram 015

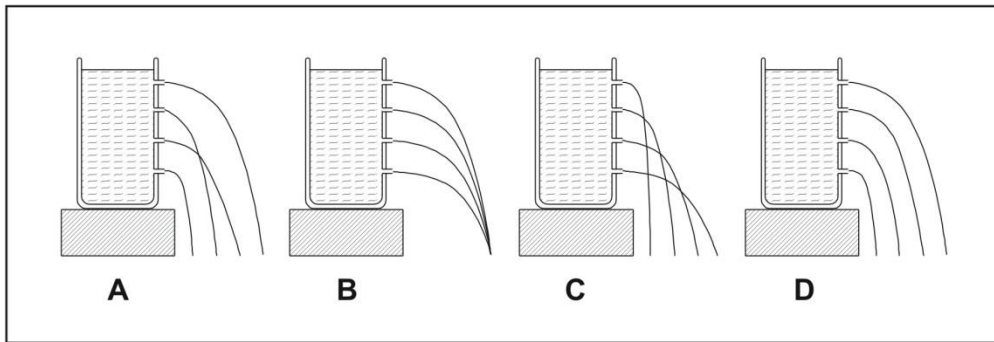


Diagram 016

ANGLES	SINE	COSINE	TANGENT
0	0	1	0
30	0.5	0.866	0.577
45	0.707	0.707	1
60	0.866	0.5	1.732
90	1.0	0	---

Diagram 017

Entrance

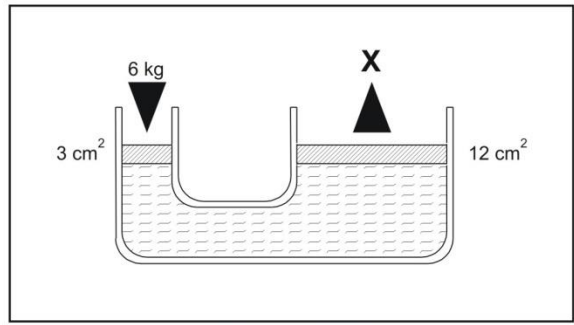


Diagram 018

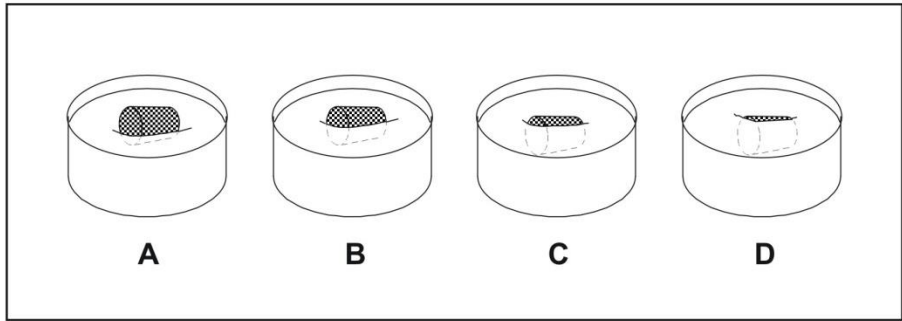


Diagram 019

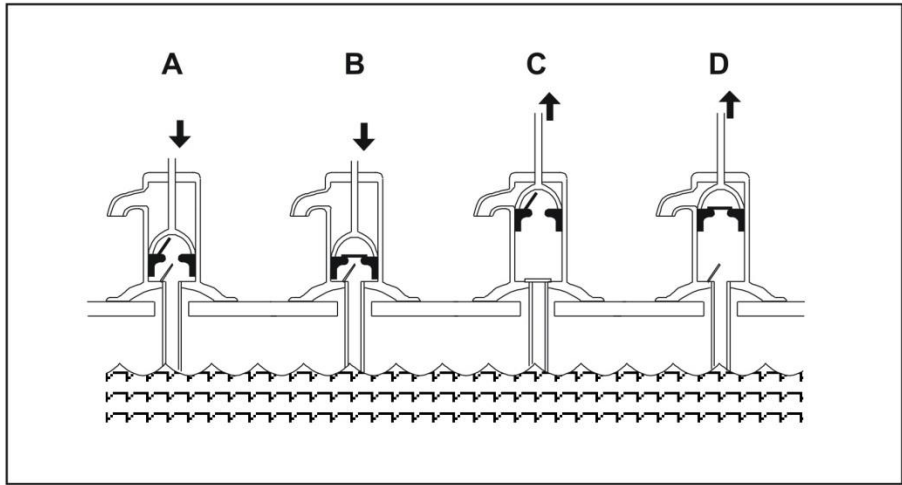


Diagram 020

Trade Entrance Exam Answer Key

1.	A
2.	D
3.	C
4.	D
5.	A
6.	D
7.	C
8.	B
9.	B
10.	B
11.	C
12.	C
13.	D
14.	C
15.	C
16.	B
17.	D
18.	D
19.	C
20.	C
21.	B
22.	A
23.	C
24.	A
25.	D
26.	D
27.	B
28.	D
29.	C
30.	C
31.	C
32.	B
33.	D
34.	A
35.	C

36.	B
37.	D
38.	A
39.	B
40.	A
41.	A
42.	C
43.	C
44.	C
45.	C
46.	B
47.	A
48.	D
49.	B
50.	D
51.	C
52.	B
53.	C
54.	D
55.	A
56.	A
57.	B
58.	A
59.	D
60.	B
61.	C
62.	A
63.	C
64.	C
65.	B
66.	D
67.	C
68.	D
69.	D
70.	C

Alberta Apprenticeship and Industry Training (AIT) Client Service Offices

For the AIT Toll-free Information Line Dial 1-800-248-4823

Bonnyville

Provincial Building, Floor 2
Box 8115
4902 - 50 Avenue
Bonnyville, AB T9N 2J

Calgary

Willow Park Centre, Suite 200, Floor 2
10325 Bonaventure Drive SE
Calgary, AB T2J 7E4

Edmonton

Centre for Applied Technologies Building
Suite 430, 11763 – 106 Street NW
Edmonton, AB T5G 2R1

Fort McMurray

Provincial Building, Floor 7
Box 19
9915 Franklin Avenue
Fort McMurray, AB T9H 2K4

Grande Prairie

Towne Centre Mall, Suite 100
9845 - 99 Avenue
Grande Prairie, AB T8V 0R3

Hinton

568 Carmichael Lane
Hinton, AB T7V 1S8

Lethbridge

Provincial Building, Room 280, Floor 2
200 - 5 Avenue South
Lethbridge, AB T1J 4L1

Medicine Hat

3021 Dunmore Road SE
Medicine Hat, AB T1B 2H2

Peace River

Midwest Building
Bag 900 - 28
9715 - 100 Street
Peace River, AB T8S 1T4

Red Deer

First Red Deer Place, Floor 3
4911 - 51 Street
Red Deer, AB T4N 6V4

Slave Lake

Slave Lake Government Centre, Suite 109
Box 787
101 - 3rd Street SW
Slave Lake, AB T0G 2A0

Vermilion

Provincial Building, Floor 1
Box 26
4701 - 52 Street
Vermilion, AB T9X 1J9



Apprenticeship and Industry Training

Alberta Trades. World Ready.

77SG03